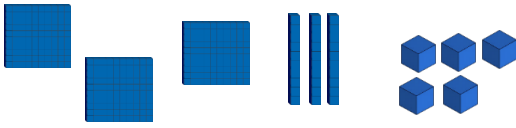


LI: To understand Place Value
C: Base 10

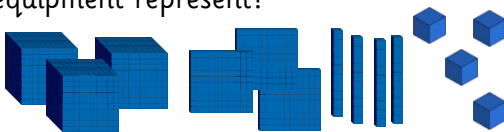
LI: To understand Place Value
C: Base 10

1. What number does the place value equipment represent?




1000s	100s	10s	1s

2. What number does the place value equipment represent?



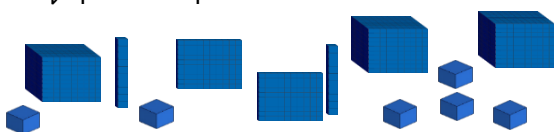
1000s	100s	10s	1s

3. What number does the place value equipment represent?



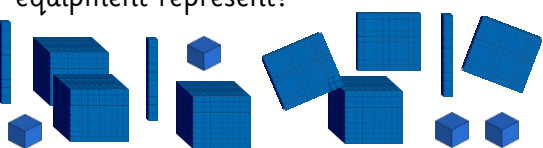
1000s	100s	10s	1s

4. What number does the place value equipment represent?




1000s	100s	10s	1s

5. What number does the place value equipment represent?



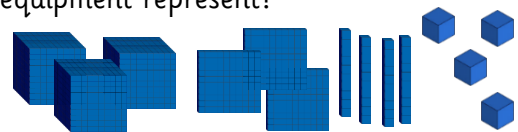
1000s	100s	10s	1s

1. What number does the place value equipment represent?




1000s	100s	10s	1s

2. What number does the place value equipment represent?



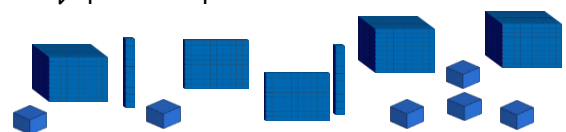
1000s	100s	10s	1s

3. What number does the place value equipment represent?



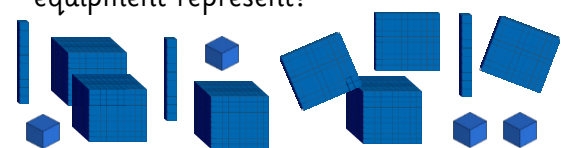
1000s	100s	10s	1s

4. What number does the place value equipment represent?



1000s	100s	10s	1s

5. What number does the place value equipment represent?



1000s	100s	10s	1s