

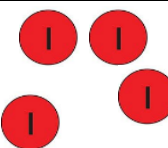





What number does the place value equipment represent?

100s	10s	1s
		

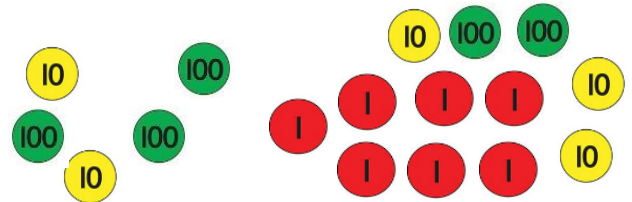
To make the number two hundred and sixty four, what equipment would I need to add?







What number does the place value equipment represent?

100s	10s	1s
		


To make the number six hundred and eighty seven, what equipment would I need to add?





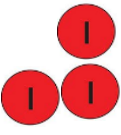
What number does the place value equipment represent?

1000s	100s	10s	1s
			

To make the number two hundred and thirty, what equipment would I need to take away?



What number does the place value equipment represent?

1000s	100s	10s	1s
			

To make nine hundred and twenty one, what equipment would I need to take away?

